



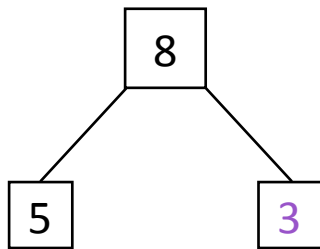
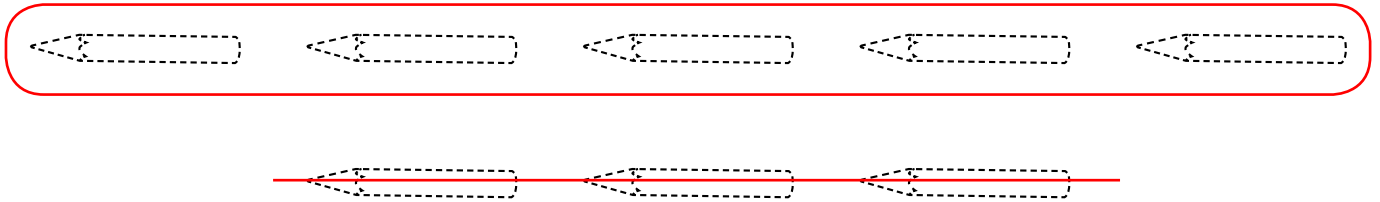
NAME \_\_\_\_\_ DATE \_\_\_\_\_

## SUBTRACTION WORD PROBLEMS

Make a math drawing and circle the part you know. Cross out the unknown part. Complete the number sentences and number bond.

**Example:**

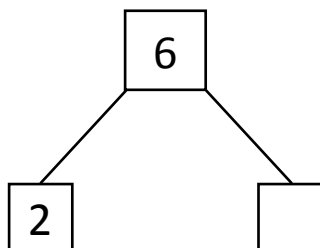

Anne has 8 pencils. She gave some pencils to Larry. Now Anne has 5 pencils. How many pencils did Anne gave to Larry?



$$\boxed{8} - \boxed{5} = \boxed{3}$$

Anne gave 3 pencils to Larry.

- 1) Toby counted 6 butterflies on a plant. After some time 2 butterflies went away. How many butterflies are remaining on the plant?



$$\boxed{6} - \boxed{2} = \boxed{\phantom{0}}$$

There are     butterflies still remaining on the plant.