



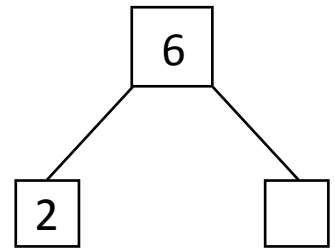

NAME _____ DATE _____

SUBTRACTION WORD PROBLEMS

Read the story. Cross off the items that are leaving the story.

Then complete the number bond, number sentence and number statement.

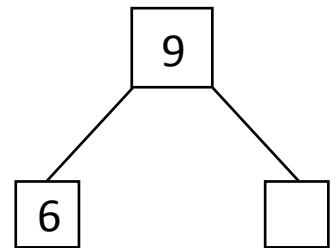
- 1) Rose has 6 balloons. She has 2 red balloons and the remaining are purple balloons.
How many purple balloons Rose is having?



$6 - 2 = \underline{\quad}$.

Rose is having kittens.

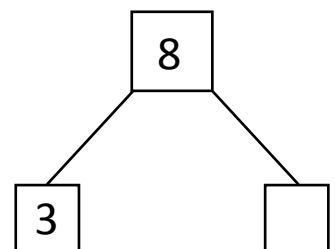
- 2) Mike kept 9 pens in the pen stand. He kept 6 blue pens and some black pens.
How many black pens Mike kept in the pen stand?



$9 - 6 = \underline{\quad}$.

Mike kept black pens in the pen stand.

- 3) Nick collected 8 books. He collected 5 comic books and some drawing books.
How many drawing books Nick collected?



$8 - 5 = \underline{\quad}$.

Nick collected drawing books.