



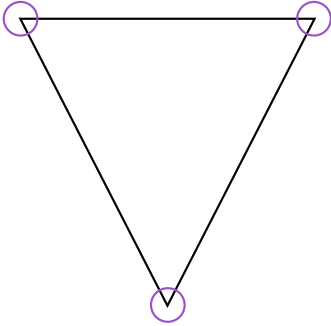
NAME _____

DATE _____

ATTRIBUTES OF GEOMETRY SHAPES

Describe two dimensional shapes based on attributes.

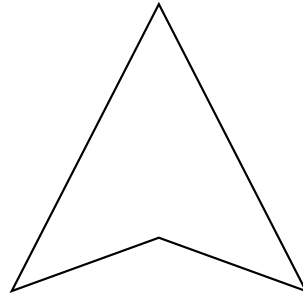
Example:



3 sides.

3 angles.

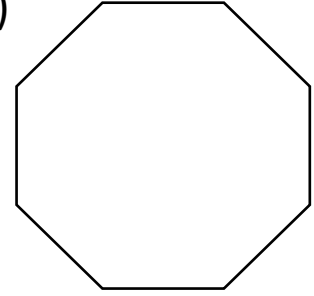
3)



__ sides.

__ angles.


6)



__ sides.

__ angles.

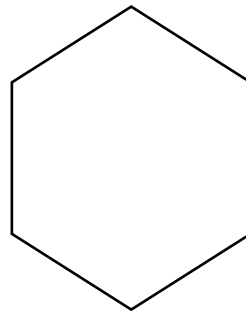
1)



__ sides.

__ angles.


4)



__ sides.

__ angles.

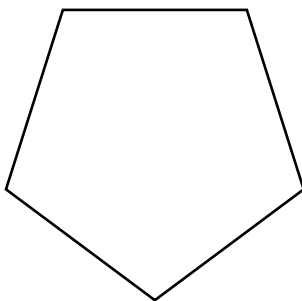
7)



__ sides.

__ angles.

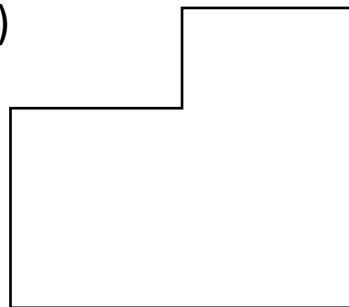
2)



__ sides.

__ angles.

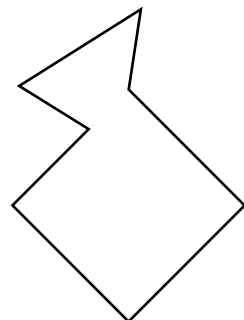
5)



__ sides.

__ angles.

8)



__ sides.

__ angles.