

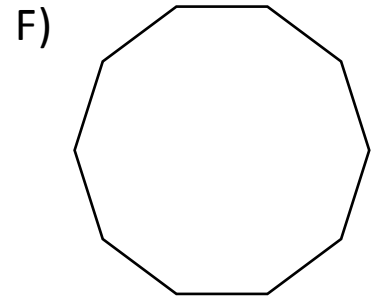
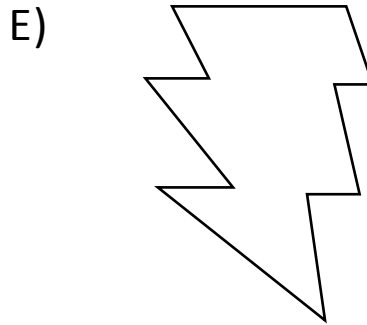
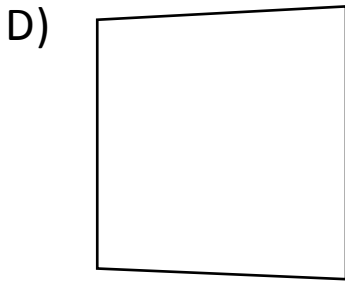
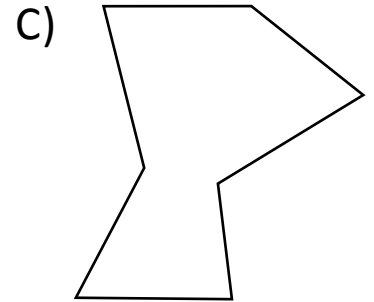
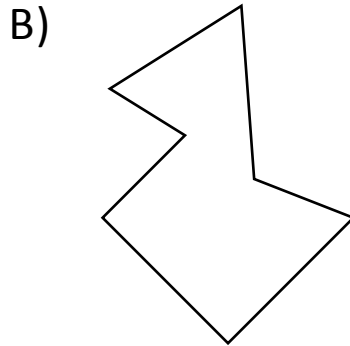
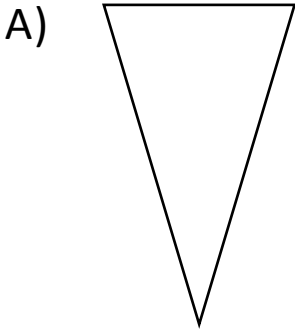


NAME _____ DATE _____

ATTRIBUTES OF GEOMETRY SHAPES

Describe two dimensional shapes based on attributes.

Example:



- 1) Which shape have the most sides? E.
- 2) Which shape have 3 more angles than shape 'C'? _____.
- 3) Which shape have 3 fewer sides than shape 'B'? _____.
- 4) How many more angles does shape 'C' have than shape 'A'? _____.
- 5) Which of these shapes have the same number of sides as angles? _____.