



NAME \_\_\_\_\_

DATE \_\_\_\_\_

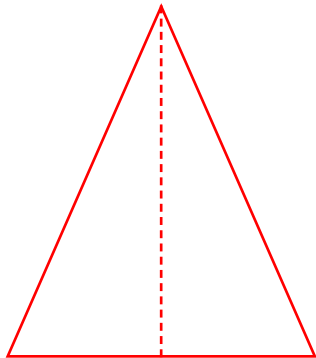
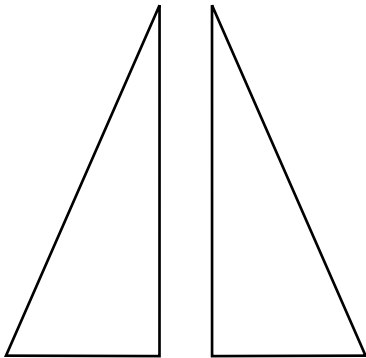
## COMPOSITE SHAPES & FRACTION CONCEPTS

Interpret equal shares in composite shapes as halves, thirds and fourths.

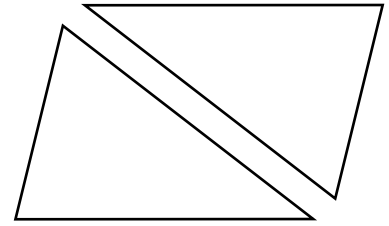
**Example:**

Solve the following puzzles using your tangram pieces. Draw your solutions in the space below.

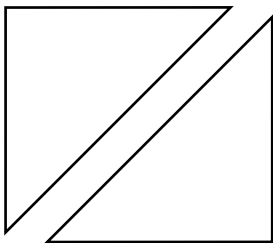
- a) Use the two smallest triangles to make one larger triangle.



- b) Use the two smallest triangles to make a parallelogram with no square corner.



- c) Use the two smallest triangles to make a square.



- d) Use two largest triangles to make a square.

