




NAME _____ DATE _____

PARTITIONING CIRCLES AND RECTANGLES

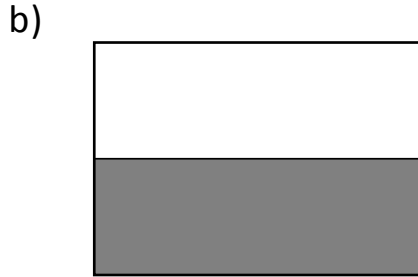
Describe a whole by the number of equal parts including 2 halves 3 thirds and 4 fourths.


Example:

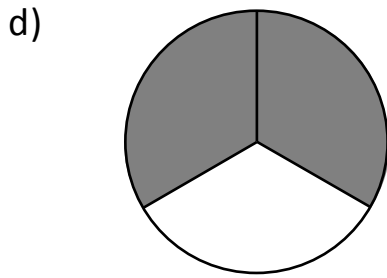
What fraction do you need to colour to shade 1 whole?

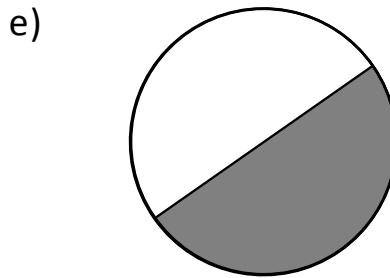


2 thirds











1) What fraction do you need to colour to shade 1 whole?

