



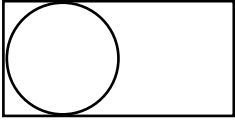
NAME _____ DATE _____

PARTITIONING CIRCLES AND RECTANGLES

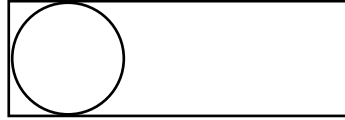
Describe a whole by the number of equal parts including 2 halves 3 thirds and 4 fourths.

1) Draw to complete each shape?

a) This is 1 half.
Draw 1 whole.



b) This is 1 third.
Draw 1 whole.



2) Draw to complete each shape?

a) This is 1 fifth.
Draw 1 whole.




b) This is 1 sixth.
Draw 1 whole.



3) Draw to complete each shape?

a) This is 1 ninth.
Draw 1 whole.



b) This is 1 fourth.
Draw 1 whole.



c) This is 1 seventh.
Draw 1 whole.

