




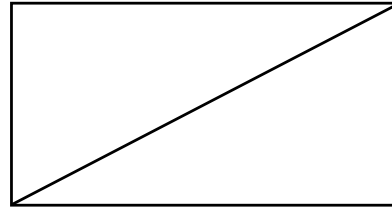
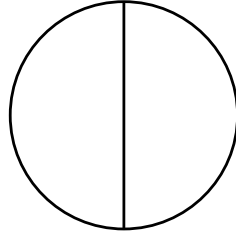

NAME _____ DATE _____

PARTITIONING CIRCLES AND RECTANGLES


Partition circles and rectangles into equal parts and describe those parts as halves, thirds or fourths.

1) Do the shapes in problem. (a) Show halves or thirds? _____.

a) Draw 1 more line to partition each shape into fourths.



b) Partition each rectangle into thirds. Shade the shapes as indicated.



3 thirds




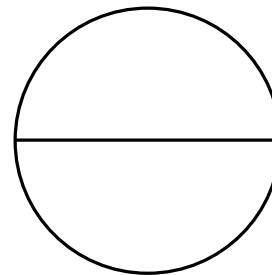
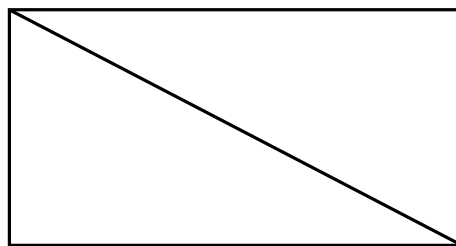

2 thirds



1 third

2) Do the shapes below show halves or thirds? _____.

a) Draw 1 more line to partition each shape into fourths.



b) Partition each rectangle into thirds. Shade the shapes as indicated.



2 thirds



1 third



3 thirds