



NAME _____

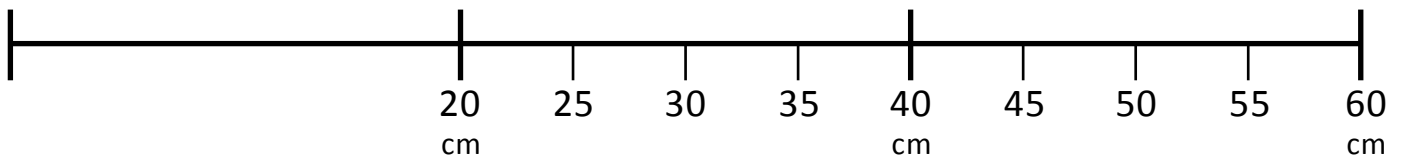
DATE _____

FINDING VALUES ON METER STRIPS

Each unit length on both number lines is 20 centimeters.

(Note: Number lines not drawn to scale).

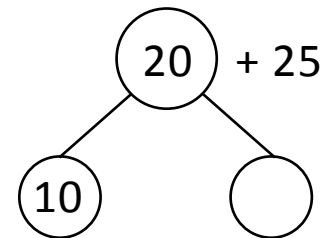
1. a) Show 20 centimeters more than 25 centimeters on the number lines.



The length of each unit is 5 centimeters.

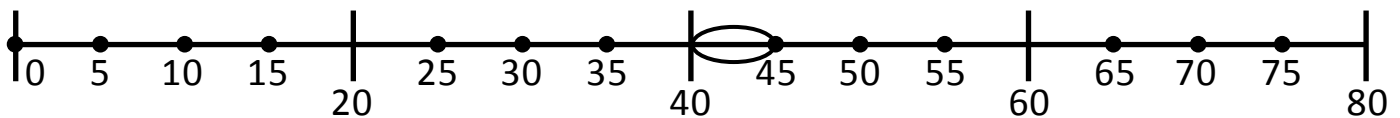
20 centimeters more than 25 centimeters.

$$= 20 + 25 = \underline{\quad} \text{ centimeters.}$$



$$= 10 + 35 = \underline{\quad}.$$

- b) Show 40 centimeters less than 45 centimeters on the number line.



The length of each unit is 5 centimeters.

40 centimeters less than 45 centimeters.

$$\bigcirc = 45 - 40 = \underline{\quad} \text{ centimeters.}$$

- c) Write an addition or subtraction sentence to match each number line.

i) $20 + 25 = \underline{\quad}$.

ii) $45 - 40 = \underline{\quad}$.