



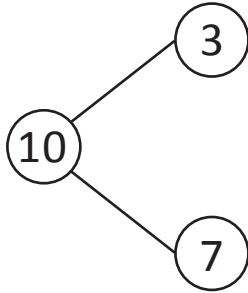
NAME _____

DATE _____

ADD OR SUBTRACT

See the example of the number bond and write the number sentence that is true.

Example:

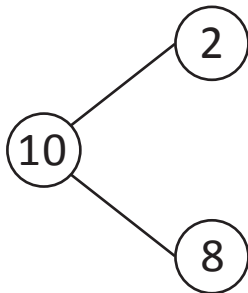


$$\underline{3} + 7 = 10$$

$$10 - \underline{3} = 7$$

Follow the example and do the same.

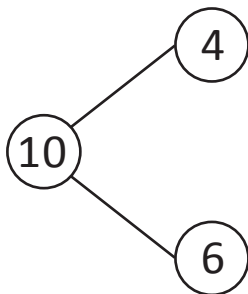
1)



$$\underline{\quad} + 2 = 10$$

$$10 - \underline{\quad} = 8$$

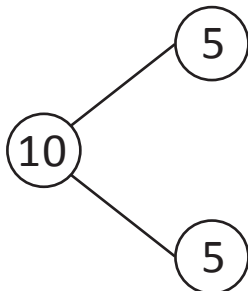
2)



$$6 + 4 = \underline{\quad}$$

$$10 - \underline{\quad} = 4$$

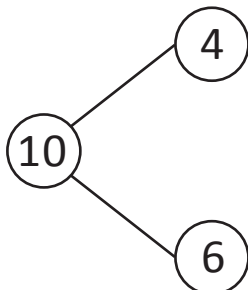
3)



$$\underline{\quad} + 5 = 10$$

$$10 - \underline{\quad} = 5$$

4)



$$4 + \underline{\quad} = 10$$

$$\underline{\quad} - 4 = 6$$