



NAME _____

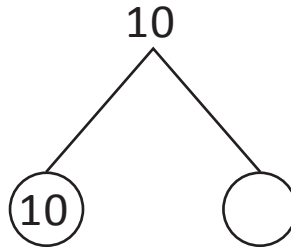
DATE _____

ADDITION/SUBTRACTION

Find the missing numbers same as above.

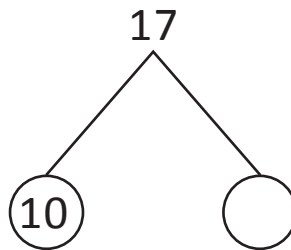
1) 10 is ___ and 10.

$$10 - 10 = \underline{\quad}$$



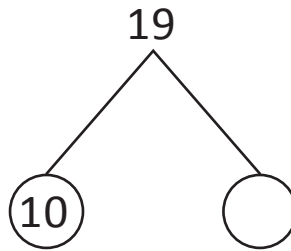
2) 10 and 7 is ____.

$$17 - 10 = \underline{\quad}$$



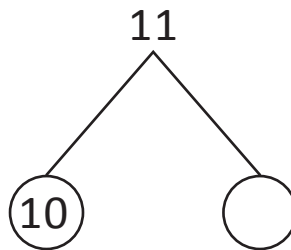
3) 10 and 9 is ____.

$$19 - 10 = \underline{\quad}$$



4) 10 and 1 is ____.

$$11 - 10 = \underline{\quad}$$



5) 10 and 3 is ____.

$$13 - 10 = \underline{\quad}$$

