



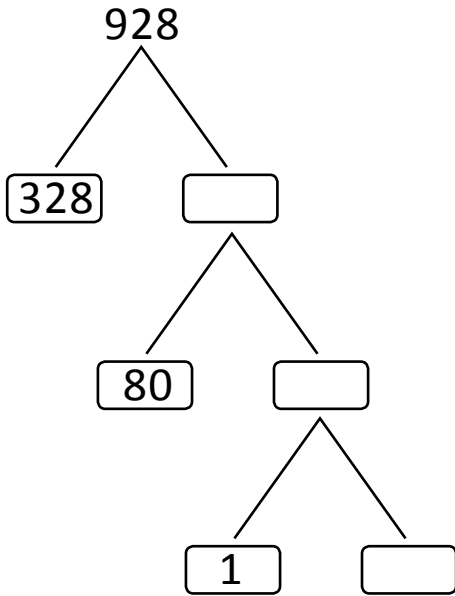
NAME _____

DATE _____

ADDITION OR SUBTRACTION

Complete all of the if... then statement. Draw a number bond to represent the related facts.

1) If $928 - \underline{\quad} = 519$, then $519 + 409 = \underline{\quad}$



$$328 \xrightarrow{80} 408 \xrightarrow{1} \underline{\quad}$$

A number bond diagram for 519 + 409. The top node is 519 + 409. It branches into 19 and 500. The 19 node branches into 9 and an empty box.

$$= 500 + 409 + 10 + 9$$

$$= 500 + 400 + 9 + 10 + 9$$

$$= 919 + 9 = \underline{\quad}$$

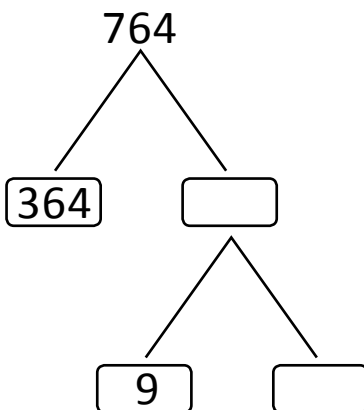
(OR)

A number bond diagram for 519 + 409. The top node is 519 + 409. It branches into 519 and 409. The 519 node branches into 500 and 19. The 409 node branches into 400 and 9. The 19 node branches into 1 and 8.

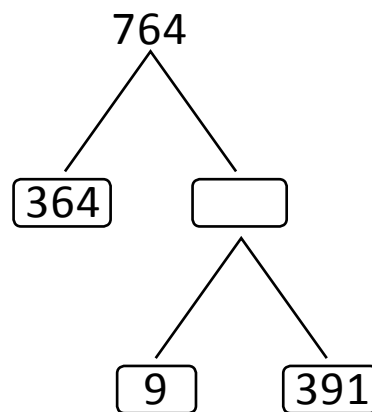
$$= 500 + 400 + 19 + 1 + 8$$

$$= \underline{\quad} + \underline{\quad} + 8 = \underline{\quad}$$

2) If $764 - \underline{\quad} = 391$, then $\underline{\quad} + 391 = 764$



$$764 - \underline{\quad} = 391$$



$$= 364 + 9 + 391 = 764$$

$$= \underline{\quad} + 391 = 764$$