



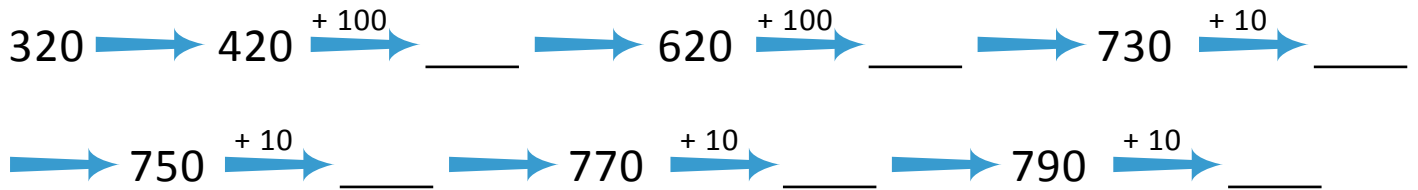
NAME _____

DATE _____

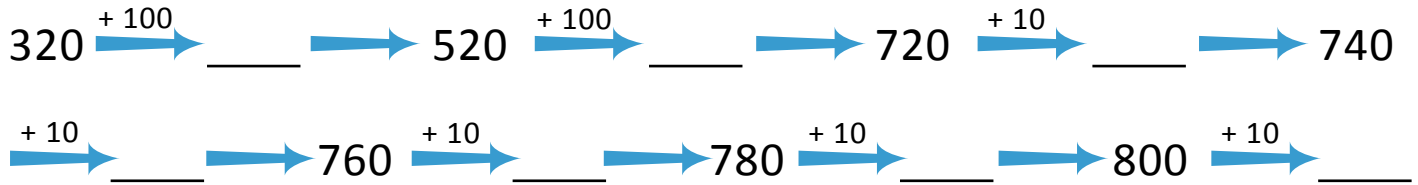
ADDITION OR SUBTRACTION

Solve each using the arrow way.

1) $320 + 480 = \underline{\hspace{2cm}}$.



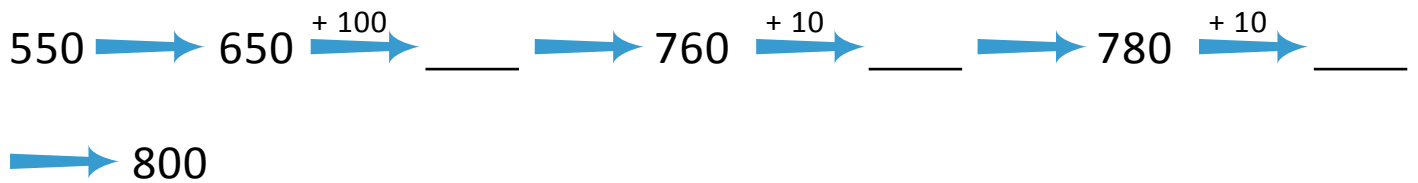
2) $320 + 490 = \underline{\hspace{2cm}}$.



3) $550 + 200 = \underline{\hspace{2cm}}$.



4) $550 + 250 = \underline{\hspace{2cm}}$.



5) $550 + 270 = \underline{\hspace{2cm}}$.

