



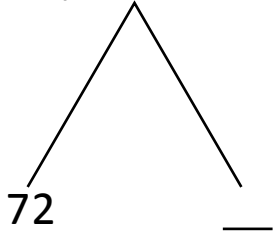
NAME _____

DATE _____

ADDITION OR SUBTRACTION

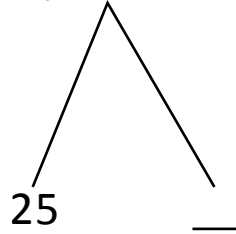
Solve the addition sentence by using number bond.

1) 73 tens + 19 tens = ____ tens.



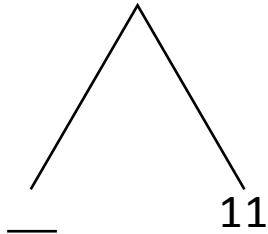
72 + ____ = 92 tens.

5) 27 tens + 48 tens = ____ tens.



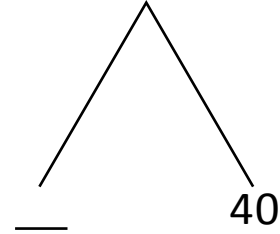
25 + ____ = ____ tens.

2) 67 tens + 14 tens = ____ tens.



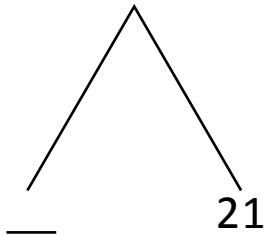
70 + ____ = ____ tens.

6) 37 tens + 43 tens = ____ tens.



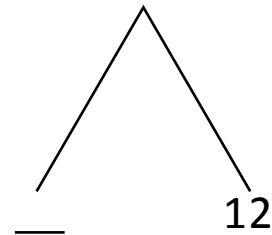
____ + 40 = ____ tens.

3) 69 tens + 22 tens = ____ tens.



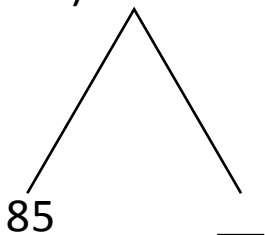
____ + 22 = ____ tens.

7) 69 tens + 13 tens = ____ tens.



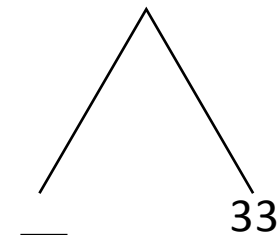
____ + 12 = ____ tens.

4) 86 tens + 9 tens = ____ tens.



85 + ____ = ____ tens.

8) 56 tens + 37 tens = ____ tens.



____ + 33 = ____ tens.