



NAME _____

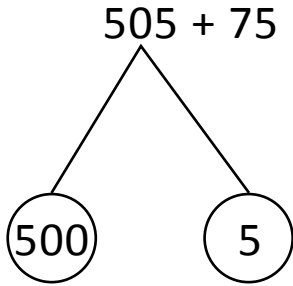
DATE _____

ADDITION OR SUBTRACTION

Solve the following problems using the vertical method your place value chart and number disks. Bundle a ten or hundred when necessary.

(OR)

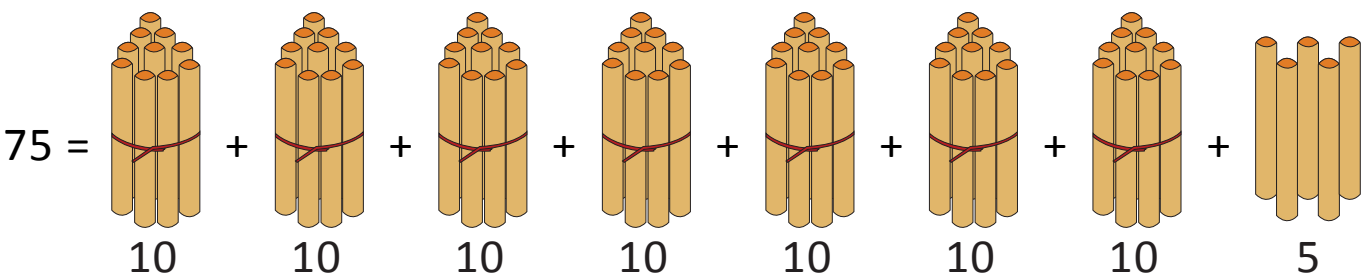
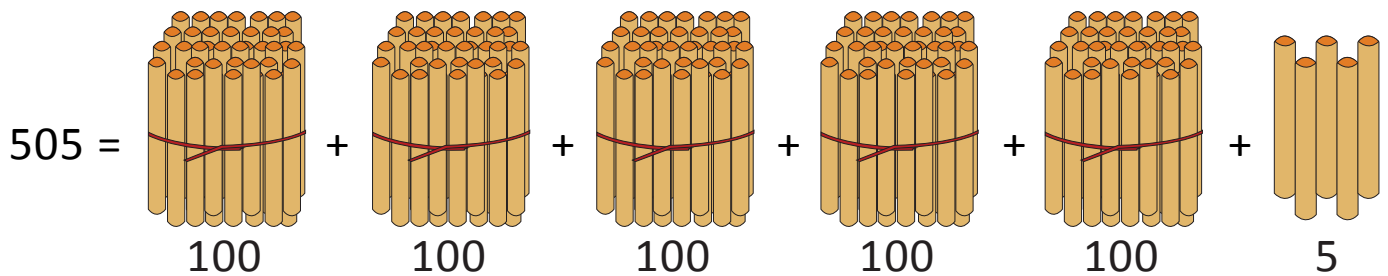
4th model:



$$500 + \underline{80} = 580 .$$

(OR)

5th model:



$$505 + 75 = \underline{5} \text{ hundreds} + \underline{7} \text{ tens} + \underline{10} \text{ ones.} \quad (10 \text{ ones} = 1 \text{ ten})$$

$$= \underline{5} \text{ hundreds} + \underline{8} \text{ tens.}$$

$$= \underline{580}$$