



NAME _____

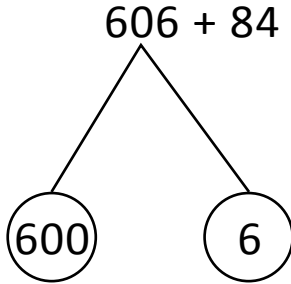
DATE _____

ADDITION OR SUBTRACTION

Solve the following problems using the vertical method your place value chart and number disks. Bundle a ten or hundred when necessary.

(OR)

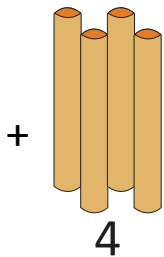
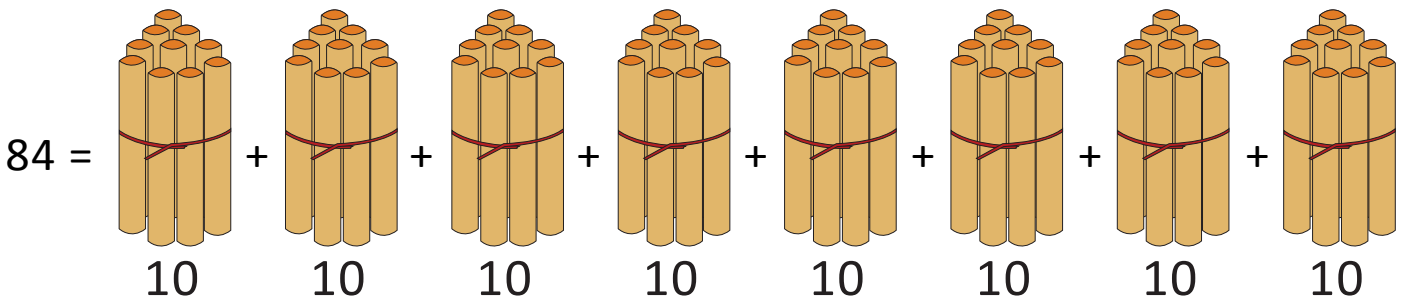
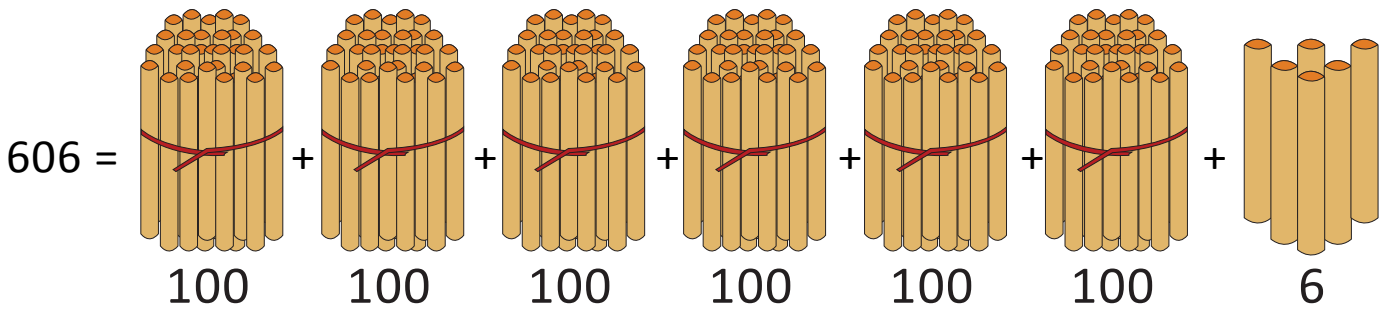
4th model:



$600 + \underline{\quad} = \underline{\quad}.$

(OR)

5th model:



10 ones = 1 ten

$606 + 84 = \underline{\quad} \text{ hundreds} + \underline{\quad} \text{ tens} + \underline{\quad} \text{ ones.}$

$= \underline{\quad} \text{ hundreds} + \underline{\quad} \text{ tens} = \underline{\quad\quad\quad} = 690.$