



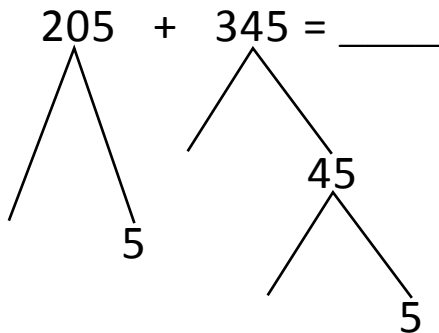
NAME \_\_\_\_\_

DATE \_\_\_\_\_

## ADDITION OR SUBTRACTION

Solve the following problems using the vertical method your place value chart and number disks. Bundle a ten or hundred when necessary.

Number bond:



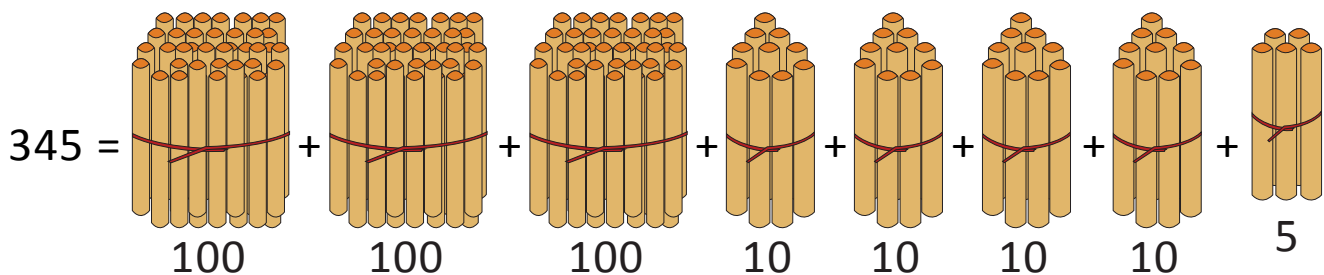
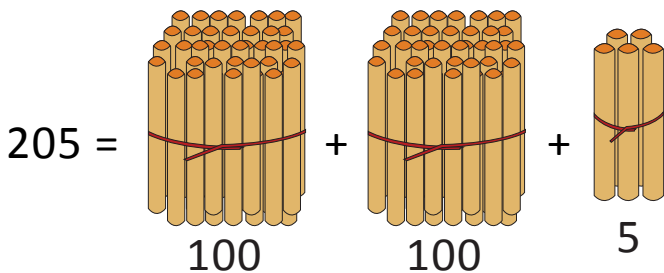
$$= 200 + 300 + 40 + 5 + 5$$

$$= \underline{\quad\quad} + 40 + \underline{\quad\quad}$$

$$= 500 + \underline{\quad\quad} = \underline{\quad\quad}$$

(OR)

Bundle 1 or 10 or 100:



$$205 + 345 = \underline{\quad} \text{ hundreds} + \underline{\quad} \text{ tens} + \underline{\quad} \text{ ones.}$$

$$= \underline{\quad} \text{ hundreds} + \underline{\quad} \text{ tens} + \underline{\quad} \text{ ten.}$$

$$= \underline{\quad} \text{ hundreds} + \underline{\quad} \text{ tens} = \underline{\quad\quad\quad}.$$