



NAME _____

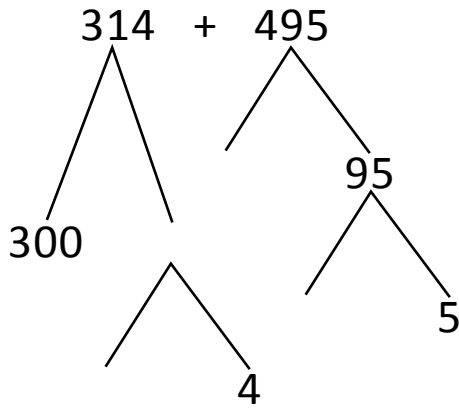
DATE _____

ADDITION OR SUBTRACTION

Solve the following problems using the vertical method your place value chart and number disks. Bundle a ten or hundred when necessary.

(OR)

4th model:



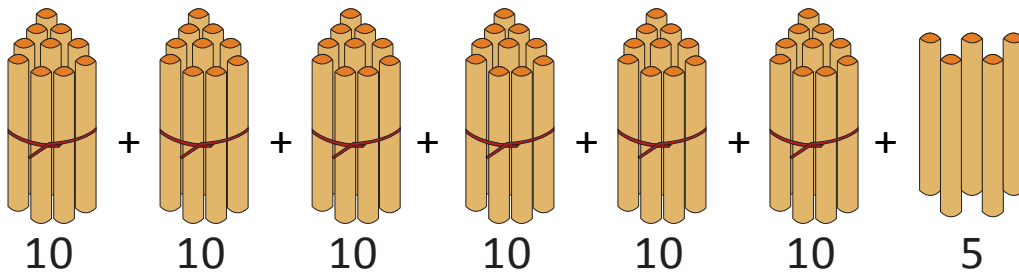
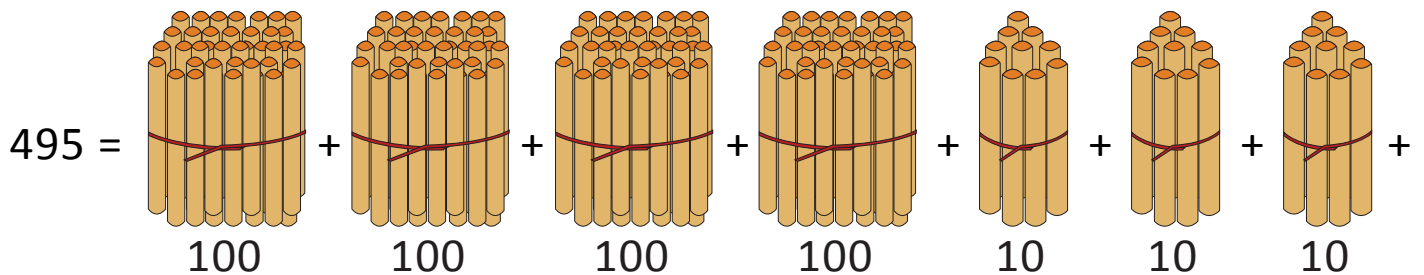
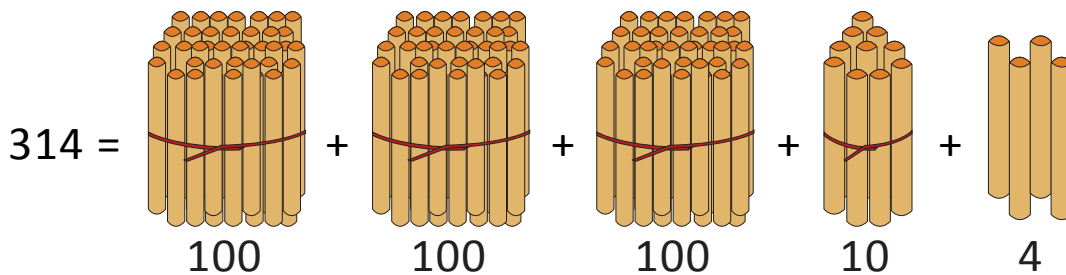
$$= 300 + 10 + 90 + 4 + 5 + 400$$

$$= \underline{\quad} + \underline{\quad} + 9 + 400$$

$$= \underline{\quad} + 9 = \underline{\quad}$$

(OR)

5th model:



$$314 + 495 = \underline{\quad} \text{ hundreds} + \underline{\quad} \text{ tens} + \underline{\quad} \text{ ones.}$$

$$10 \text{ tens} = \underline{\quad} \text{ hundred.}$$

$$= \underline{\quad} \text{ hundreds} + \underline{\quad} \text{ tens} = \underline{\quad}.$$