



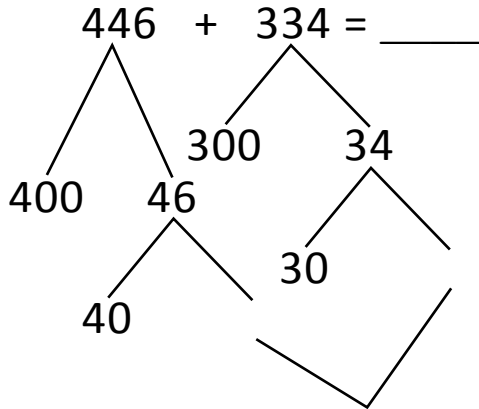
NAME \_\_\_\_\_

DATE \_\_\_\_\_

## ADDITION OR SUBTRACTION

Solve the following problems using the vertical method your place value chart and number disks. Bundle a ten or hundred when necessary.

Number bond:



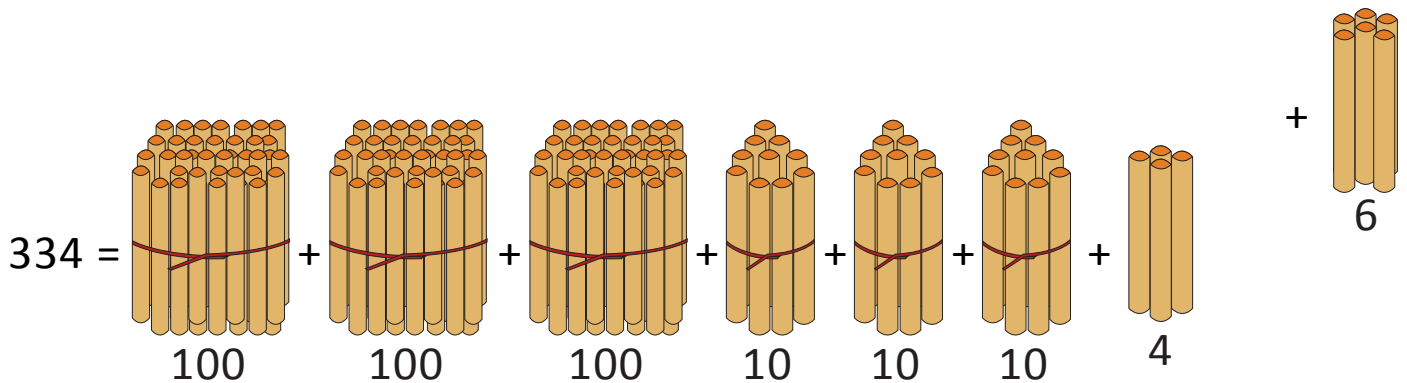
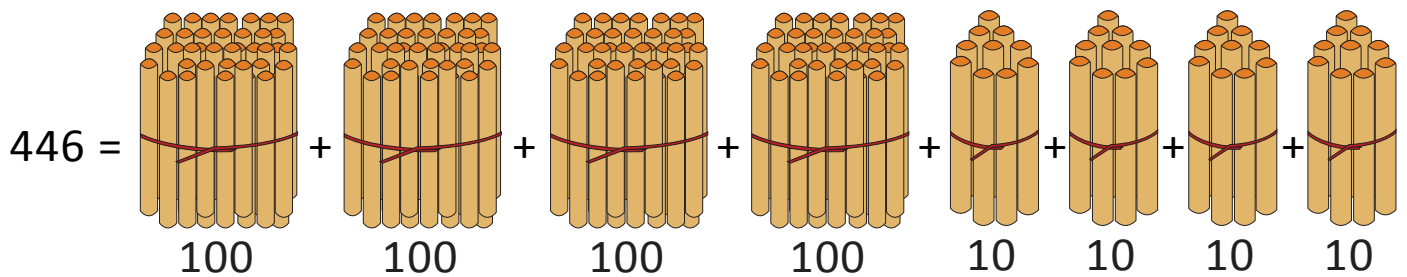
$$= 400 + \underline{\quad} + 40 + \underline{\quad} + \underline{\quad}$$

$$= \underline{\quad} + \underline{\quad}$$

$$= \underline{\quad}$$

(OR)

Bundle 1 or 10 or 100:



(10 ones = 1 tens)

$$446 + 334 = \underline{\quad} \text{ hundreds} + \underline{\quad} \text{ tens} + \underline{\quad} \text{ ones.}$$

$$= \underline{\quad} \text{ hundreds} + \underline{\quad} \text{ tens.}$$

$$= \underline{\quad} + \underline{\quad} = \underline{\quad}.$$