



NAME _____

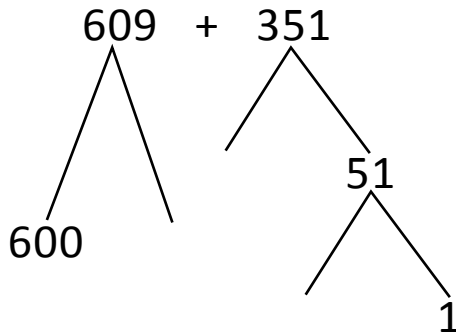
DATE _____

ADDITION OR SUBTRACTION

Solve the following problems using the vertical method your place value chart and number disks. Bundle a ten or hundred when necessary.

(OR)

4th model:



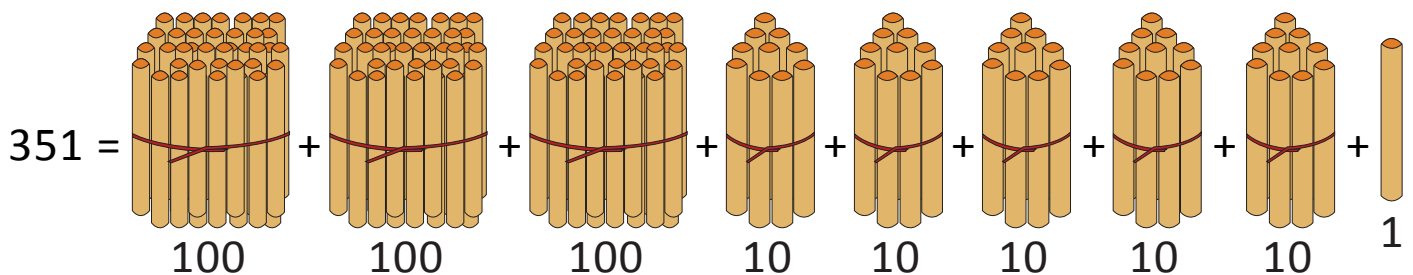
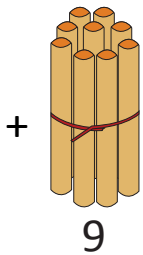
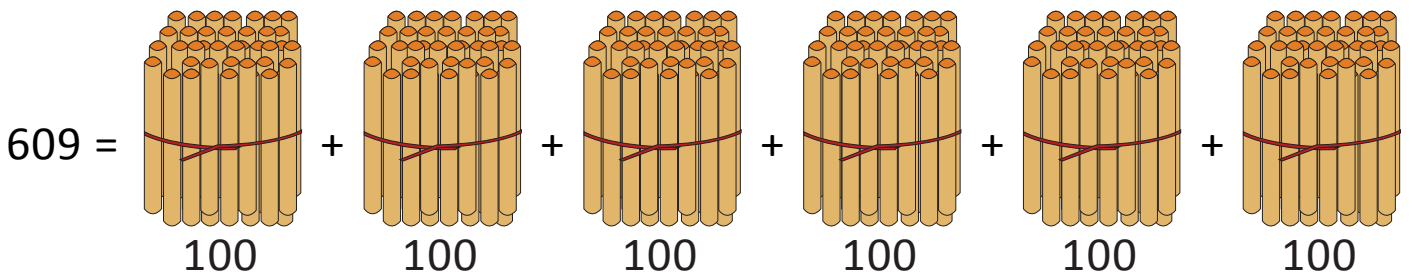
$$= 600 + \underline{\quad} + \underline{\quad} + 9 + 1$$

$$= \underline{\quad} + 50 + \underline{\quad}$$

$$= 900 + \underline{\quad} = 960$$

(OR)

5th model:



$$609 + 351 = \underline{\quad} \text{ hundreds} + \underline{\quad} \text{ tens} + \underline{\quad} \text{ ones.} \quad (10 \text{ ones} = 1 \text{ ten}).$$

$$= 900 + \underline{\quad} = \underline{\quad}.$$