



NAME \_\_\_\_\_

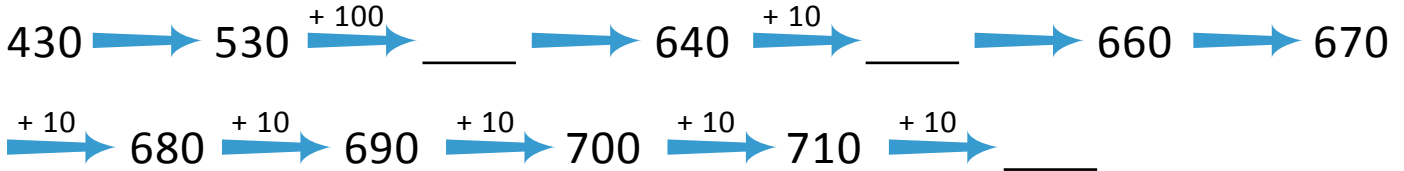
DATE \_\_\_\_\_

## ADDITION OR SUBTRACTION

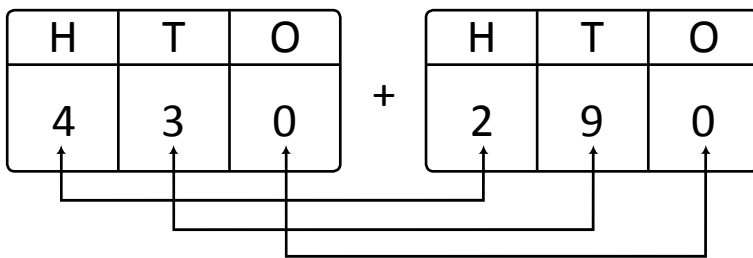
Solve using arrow way or mental math. Use scratch paper if needed.

1)  $430 + 290 =$  \_\_\_\_\_

Arrow way:



Mental math: Place value totals.



Hundreds =  $\underline{\quad} + \underline{\quad} = 6$

Tens =  $\underline{\quad} + \underline{\quad} = 12$

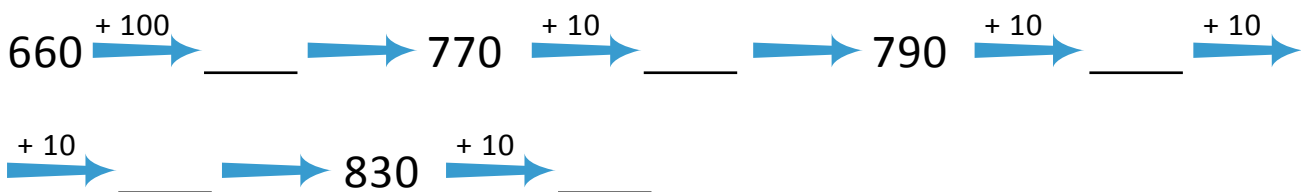
=  $\underline{\quad}$  tens + 2 tens

=  $\underline{\quad}$  hundred + 2 tens

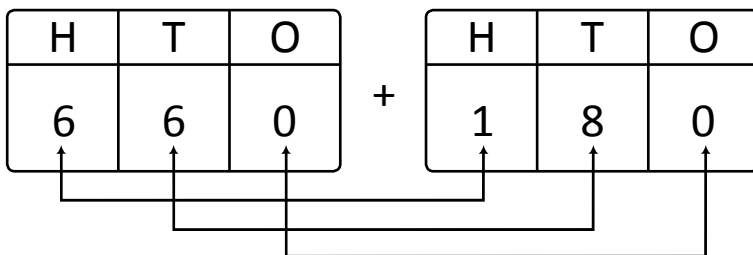
$430 + 290 =$   $\underline{\quad}$  hundreds  $\underline{\quad}$  tens = \_\_\_\_\_.

2)  $660 + 180 =$  \_\_\_\_\_

Arrow way:



Mental math: Place value totals.



Hundreds =  $\underline{\quad} + \underline{\quad} = \underline{\quad}$

Tens =  $\underline{\quad} + \underline{\quad} = 14$

= 10 tens +  $\underline{\quad}$  tens

=  $\underline{\quad}$  hundred + 4 tens

$660 + 180 =$  8 hundreds 4 tens = \_\_\_\_\_.