



NAME \_\_\_\_\_

DATE \_\_\_\_\_

## MAKE A TEN TO ADD WITH IN 20

Base ten problems in addition and subtraction.

1. Susan has a new pack of 10 pencils and 4 pencils from an old pack. She gave 6 pencils from the new pack to her brother. How many pencils does she have left?

Pencils in the new pack = \_\_\_

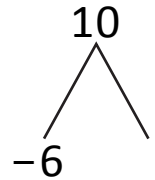
Pencils in the old pack = \_\_\_

She gave pencils to his brother from new pack = \_\_\_

Remaining pencils in the new pack = \_\_\_ - 6 = \_\_\_

Number of pencils she have left = \_\_\_ + 4 = \_\_\_

New pack



Old pack

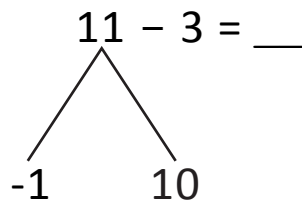
4

4 + 4 = \_\_\_

2. Marco brought his marbles collection to school. He has 11 blue marbles and 7 red marbles. At school, Marco lost 3 of his blue marbles.

Marco has blue marbles = 11

He lost blue marbles = 3



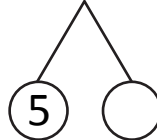
10 - 3 = 7

7 + 1 = 8

Now he left with blue marbles = \_\_\_

Marco has red marbles = 7

Total marbles that he has left = 8 + 7



= 5 + \_\_\_

= \_\_\_

a) How many blue marbles does he have now? = \_\_\_

b) How many marbles does he have left = \_\_\_