

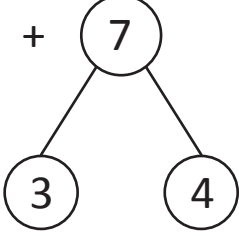
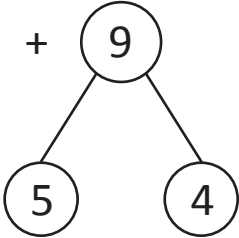
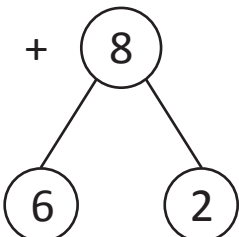
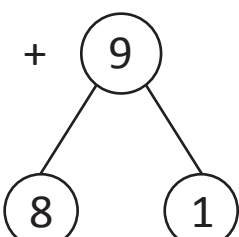
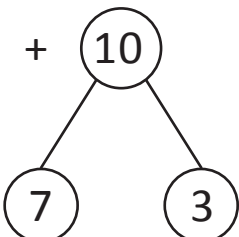
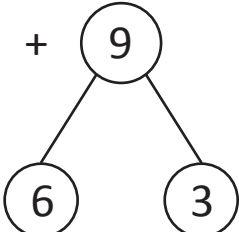


NAME _____

DATE _____

MAKE A TEN TO ADD WITH IN 20

Solve the facts by recording make ten solutions with number bonds. Then draw a line connecting each one with the number sentence showing how you added the remaining ones to ten.

- 1) $7 + 7$
- 
- ☐ $10 + 3$
- 2) $5 + 9$
- 
- ☐ $10 + 4$
- 3) $4 + 8$
- 
- ☐ $10 + 4$
- 4) $2 + 9$
- 
- ☐ $10 + 2$
- 5) $3 + 10$
- 
- ☐ $10 + 1$
- 6) $4 + 9$
- 
- ☐ $10 + 3$