



NAME \_\_\_\_\_

DATE \_\_\_\_\_

## SOLVING PROBLEMS ON NUMBER BONDS

Solve the following problems as done above circle the number sentence if you must subtract from the 10.

1)  $18 - 6 = \underline{\quad}$

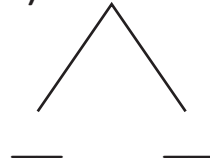


$8 - 6 = \underline{\quad}$

$10 + 2 = \underline{\quad}$

$18 - 6 = \underline{\quad}$

4)  $19 - 6 = \underline{\quad}$

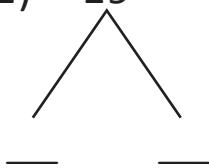


$9 - 6 = \underline{\quad}$

$10 + 3 = \underline{\quad}$

$19 - 6 = \underline{\quad}$

2)  $19 - 3 = \underline{\quad}$

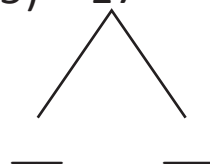


$9 - 3 = \underline{\quad}$

$10 + 6 = \underline{\quad}$

$19 - 3 = \underline{\quad}$

5)  $17 - 8 = \underline{\quad}$

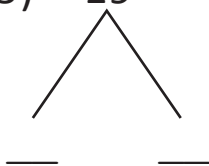


$10 - 8 = \underline{\quad}$

$2 + 7 = \underline{\quad}$

$17 - 8 = \underline{\quad}$

3)  $19 - 5 = \underline{\quad}$

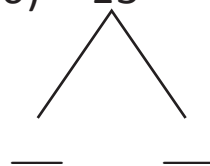


$9 - 5 = \underline{\quad}$

$10 + 4 = \underline{\quad}$

$19 - 5 = \underline{\quad}$

6)  $13 - 8 = \underline{\quad}$



$10 - 8 = \underline{\quad}$

$2 + 3 = \underline{\quad}$

$13 - 8 = \underline{\quad}$