



NAME _____

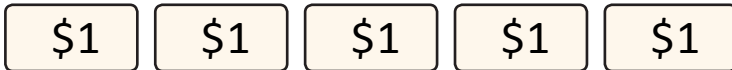
DATE _____

COUNTING MONEY IN DOLLARS

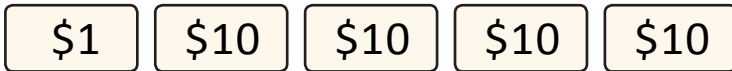
Count the total value of \$1, \$10 and \$100 bills up to \$1000.

Write the total value of the money shown below in numeral and expanded form.

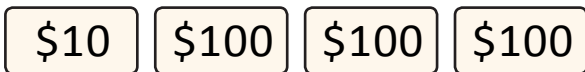
Example:



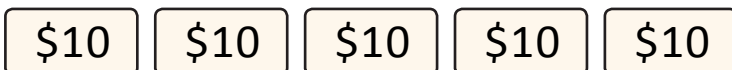
Numeral form = **356**\$.



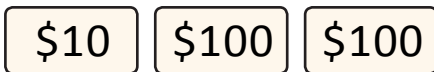
Expanded form = **300**\$ + **50**\$ + **6**\$.



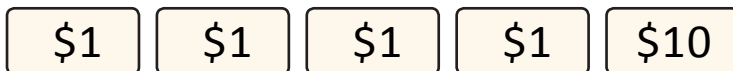
Numeral form = ____\$.



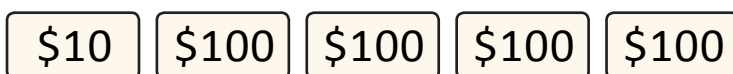
Expanded form = ____\$ + ____\$ + ____\$.



2)



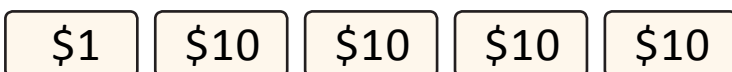
Numeral form = ____\$.



Expanded form = ____\$ + ____\$ + ____\$.



Numeral form = ____\$.



Expanded form = ____\$ + ____\$ + ____\$.

