



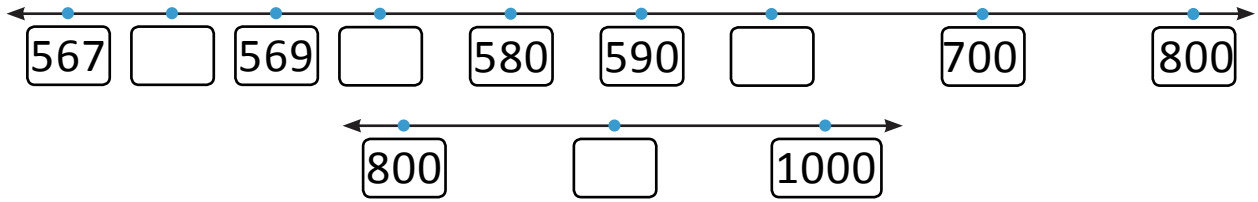
NAME _____

DATE _____

FINDING JUMPING NUMBERS

Draw and label the jumps on the number line for the given numbers.

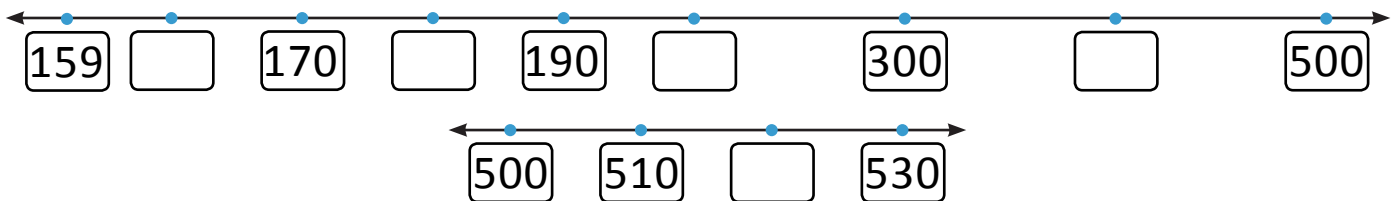
- 1) Draw and label the jumps on the number line to move from 567 to 1000.



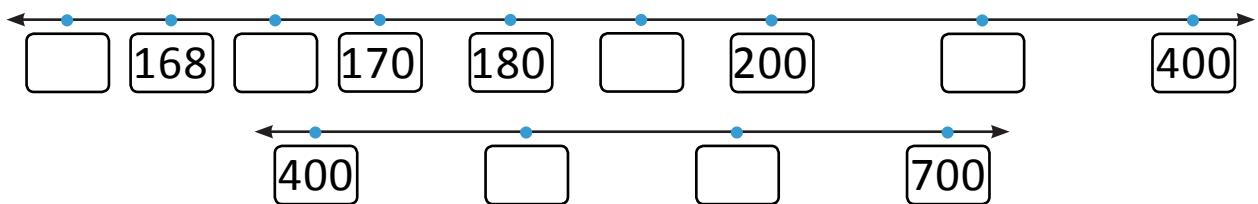
- 2) Draw and label the jumps on the number line to move from 132 to 160.



- 3) Draw and label the jumps on the number line to move from 159 to 530.



- 4) Draw and label the jumps on the number line to move from 167 to 700.



- 5) Draw and label the jumps on the number line to move from 197 to 900.

