



NAME \_\_\_\_\_

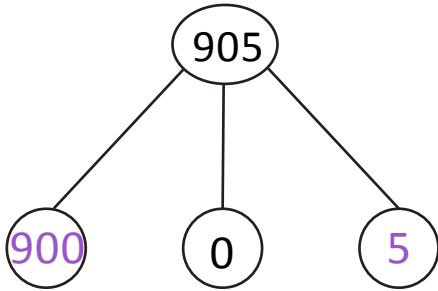
DATE \_\_\_\_\_

## NUMBERS IN WORD FORMS

Write base ten three digit numbers in unit form. Show the value of each digit.

Example:

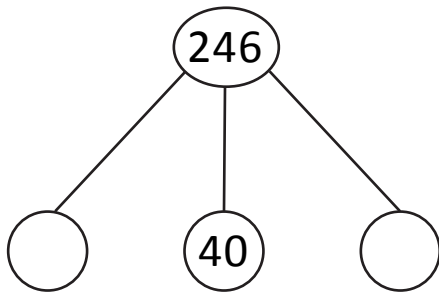
Write 905 in unit form.



9 hundreds 5 ones.

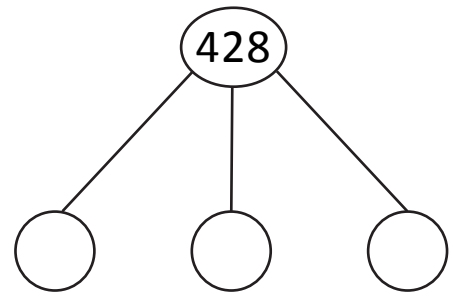
Observe the above example and complete the following.

1. Write 246 in unit form.



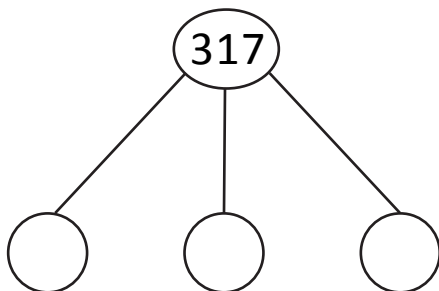
\_\_\_ hundreds \_\_\_ tens \_\_\_ ones.

3. Write 428 in unit form.



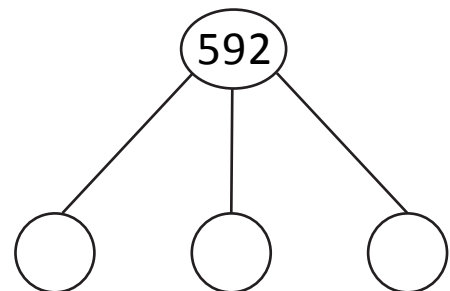
\_\_\_ hundreds \_\_\_ tens \_\_\_ units.

2. Write 317 in unit form.



\_\_\_ hundreds \_\_\_ tens \_\_\_ ones.

4. Write 592 in unit form.



\_\_\_ hundreds \_\_\_ tens \_\_\_ units.