



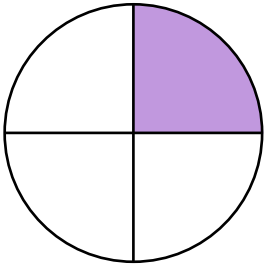
NAME _____ DATE _____

APPLICATION OF FRACTIONS TO TELL TIME

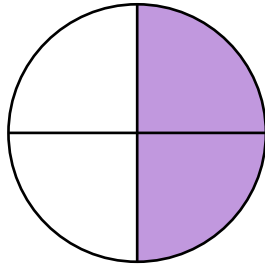
Construct a paper clock by partitioning a circle into halves and quarters and tell time to the half hour or quarter hour.

Example:

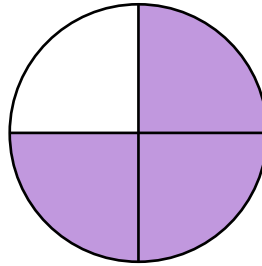
a) Tell what fraction of each clock is shaded in the space below using the words quarter, quarters, half or halves.




1 Quarter



2 Quarters




3 Quarters



4 Quarters
(Complete whole part)

b) What the time is shown on each clock.



6:00

