



NAME _____

DATE _____

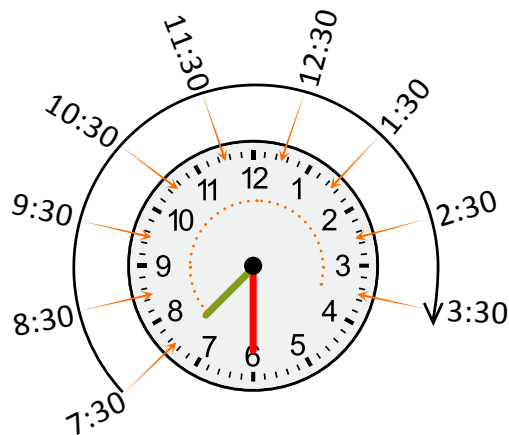
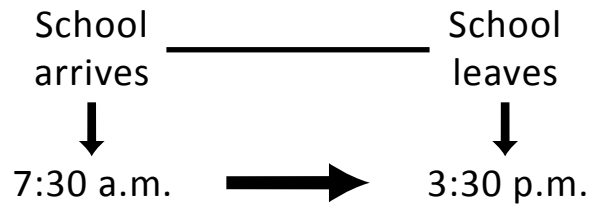
APPLICATION OF FRACTIONS TO TELL TIME

Solve elapsed time problems involving whole hours and a half hour.

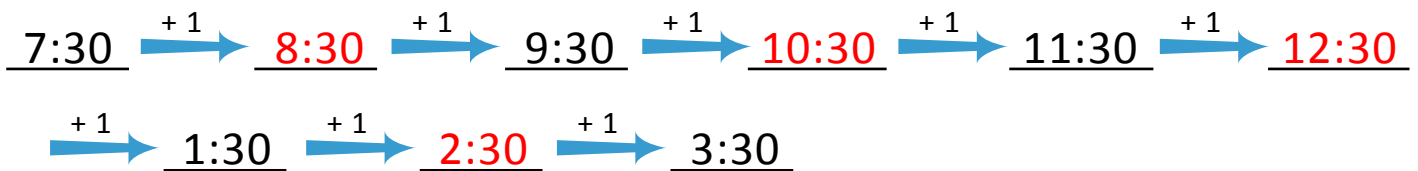
Example:

Tracy arrives at school at 7:30 a.m. She leaves school at 3:30 p.m. How long is Tracy at school.

Solution:



By arrow way:



Tracy is 8 hours at school.

1) Anna spent 3 hours at dance practice. She finished at 6:15 p.m. What time did she start?

Solution:

Time is taken for dance practice ___ hours.

Anna finished dance at _____ p.m.

By arrow way:



Anna started her dance practice at _____ p.m.

