




NAME _____ DATE _____

APPLICATION OF FRACTIONS TO TELL TIME

Construct a paper clock by partitioning a circle into halves and quarters and tell time to the half hour or quarter hour.


1) Match each time to the correct clock by drawing a line.

Quarter to 4




Half past 8

8:30



3:45



1:15