



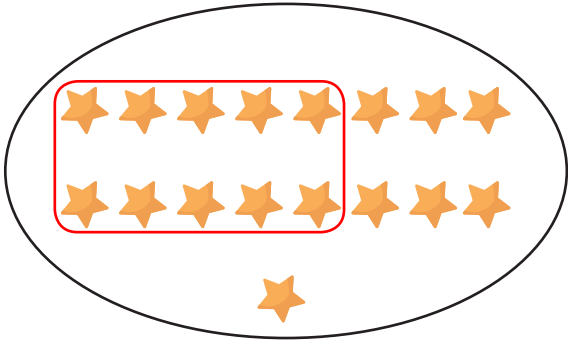
NAME _____

DATE _____

ADDITION MADE EASY

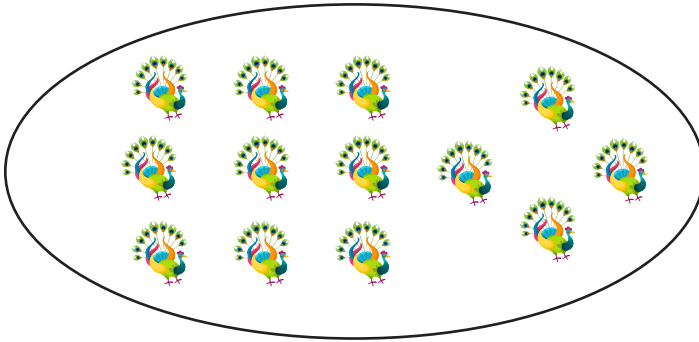
See the following objects and round off 10 as a group. Count the remaining objects and write your answer in the blanks in correctly.

Example:

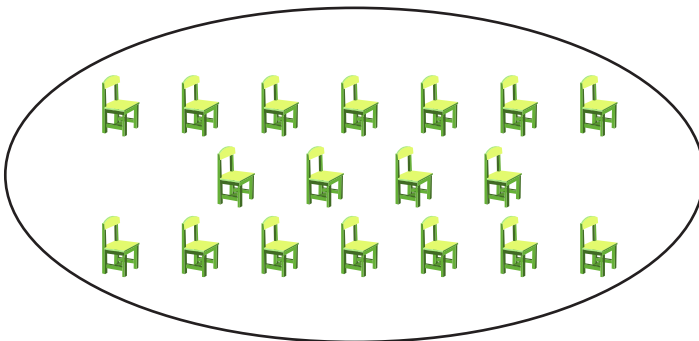


$$10 + \underline{7} = \underline{17}$$

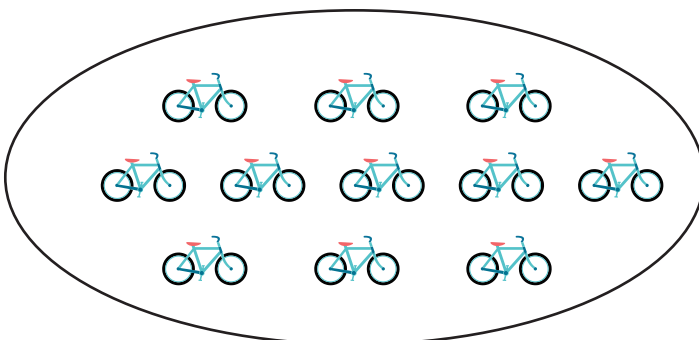
Do the following problems as given in the example.



$$10 + \underline{\quad} = \underline{\quad}$$



$$10 + \underline{\quad} = \underline{\quad}$$



$$10 + \underline{\quad} = \underline{\quad}$$