



NAME _____

DATE _____

ADDITIONS

Fill in the blank to make the sentence true.

1) Margaret went to camp for 8 hours on Saturday and 4 hours on Sunday. Sandra went to camp for 6 hours on Saturday and 5 hours on Sunday.

a) How many hours did Margaret spend at camp?

$$8 + 4$$

$$(8 + 2) + \underline{\quad}$$

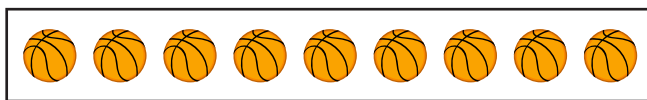
$$\underline{\quad} + 2 = \underline{\quad} \text{ hours.}$$

b) How many hours did Sandra spend at camp?

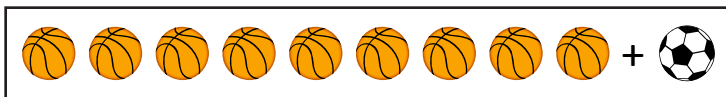
$$6 + 5 = 6 + 4 + 1$$

$$= \underline{\quad} \text{ hours} + 1 \text{ hour} = \underline{\quad} \text{ hours}$$

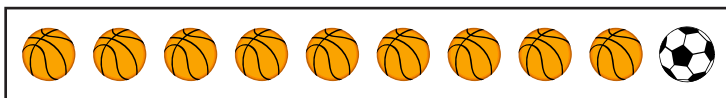
2) Draw to explain how to add 9 and 4 by making 10.



+



+

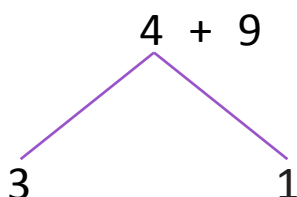


+



$$\text{Total balls} = \underline{\quad} + \underline{\quad} = 13$$

By Using number bond:



$$9 + 1 = \underline{\quad}$$

$$10 + 3 = \underline{\quad}$$