



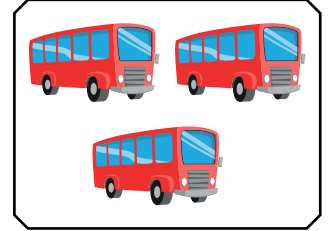


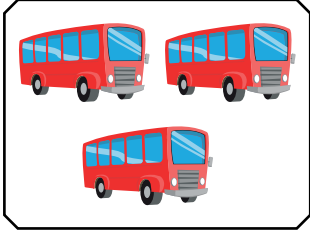
NAME \_\_\_\_\_

DATE \_\_\_\_\_

# FOUNDATION CONCEPT FOR MULTIPLICATION

Learn the multiplication by repeated addition.

1)








**Solution:**

--	--	--	--

$$= \_ + \_ + \_ + \_ = \_.$$

$$= 4 \text{ groups of } 3 = \_.$$

2)



**Solution:**

--	--	--	--	--

$$= \_ + \_ + \_ + \_ + \_ = \_.$$

$$= 5 \text{ groups of } 5 \text{ bananas} = \_.$$