






NAME \_\_\_\_\_

DATE \_\_\_\_\_

# FOUNDATION CONCEPT FOR MULTIPLICATION

Learn the multiplication by repeated addition.

Example:





**Solution:**




$$= \underline{5} + \underline{5} + \underline{5} = \underline{15}.$$

$$= 3 \text{ groups of } 5 = \underline{15}.$$

1)



**Solution:**



$$= \underline{\quad} + \underline{\quad} + \underline{\quad} + \underline{\quad} + \underline{\quad} = \underline{\quad}.$$

$$= 5 \text{ groups of } 3 = \underline{\quad}.$$