



NAME _____

DATE _____

ARRANGEMENT OF ROWS AND COLUMNS

Solve word problems involving addition of equal groups in rows and columns.

Each word problem is represented with an array of objects. Write an addition number sentence to match each array.

- 1) Olivia put 5 pictures on each page in her sticker album. She filled 5 pages with stickers. How many stickers did Olivia use?

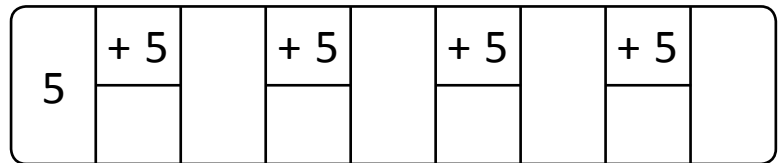


5 rows of 5 = ____.

__ + __ + __ + __ + __ = ____.




Tape diagram:



__ + __ + __ + __ + __ = ____.



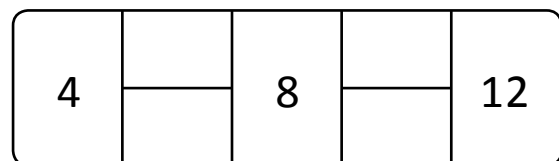
- 2) Melody stacked her blocks in 3 columns of 4. How many blocks did melody stack in all?



3 columns of __ = ____.

__ + __ + __ = ____.

Tape diagram:



__ + __ + __ = ____.