



NAME _____

DATE _____


DECOMPOSE ARRAYS

Decompose arrays into rows and columns, and relate to repeated addition.

1) Complete each missing part describing the each arrays.

a)

Circles rows




3 rows of ____.

$$_ + _ + _ = _.$$

b)

Circle columns

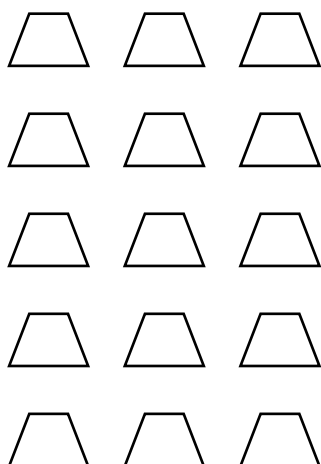


4 columns of ____.

$$_ + _ + _ + _ = _.$$

c)

Circles rows




5 rows of ____.

$$_ + _ + _ + _ + _ = _.$$

d)

Circle columns



3 columns of ____.

$$_ + _ + _ = _.$$