



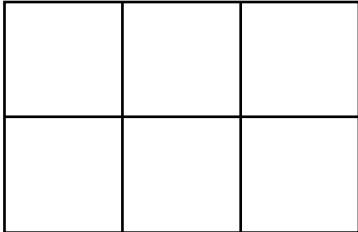
NAME \_\_\_\_\_

DATE \_\_\_\_\_

## EXTENSION OF MATH DRAWINGS

Use math drawings to partition rectangle with square tiles, and relate to repeated addition.

- 1) Draw 1 more column of 2 to make a new array.



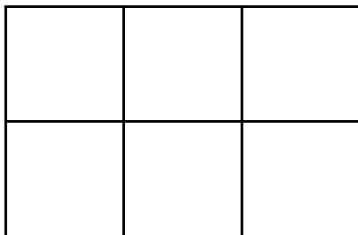
Write a repeated addition sentence for the new array.

4 columns of 2.

$$\_ + \_ + \_ + \_ = \_.$$

---

- 2) Draw 1 more row of 3 and then 1 more column to make a new array.



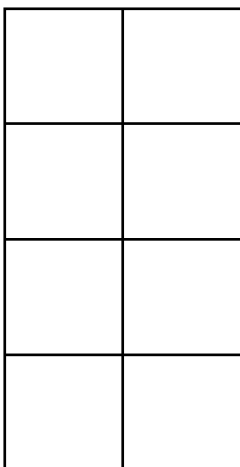
Write a repeated addition sentence for the new array.

3 rows of 4.

$$\_ + \_ + \_ = \_.$$

---

- 3) Draw 1 more row and then 2 more columns to make a new array.



Write a repeated addition sentence for the new array.

5 rows of 4.

$$\_ + \_ + \_ + \_ + \_ = \_.$$