



NAME _____

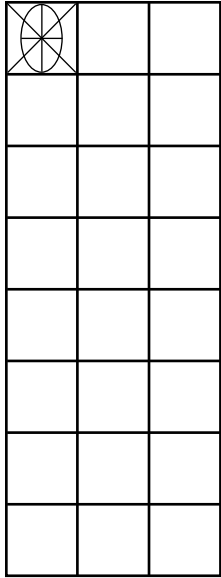
DATE _____

ARRANGEMENT OF ROWS AND COLUMNS

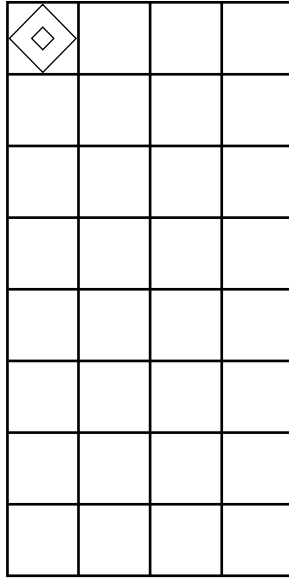
Use math drawings to compose a rectangle with square tiles.

1) Complete the following arrays without gaps or overlaps. The first tile has been drawn for you.


a) 3 columns of 8



b) 4 columns of 8

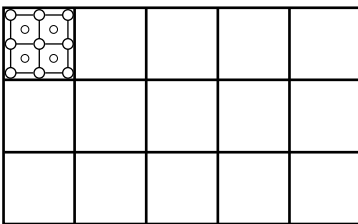


c) 6 rows of 6

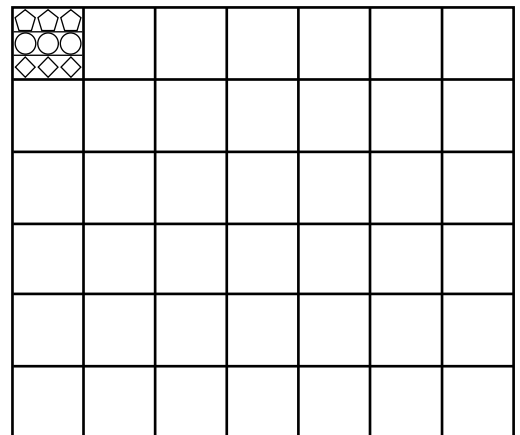


2) Complete the following arrays without gaps or overlaps. The first tile has been drawn for you.

a) 3 rows of 5



c) 6 rows of 7



b) 2 columns of 6

