




NAME _____ DATE _____

ARRANGEMENTS OF ROWS AND COLUMNS


Compose arrays from rows and columns and count to find the total using objects.

1) Draw the pens and pencils as columns of 6 as you like.

Solution:



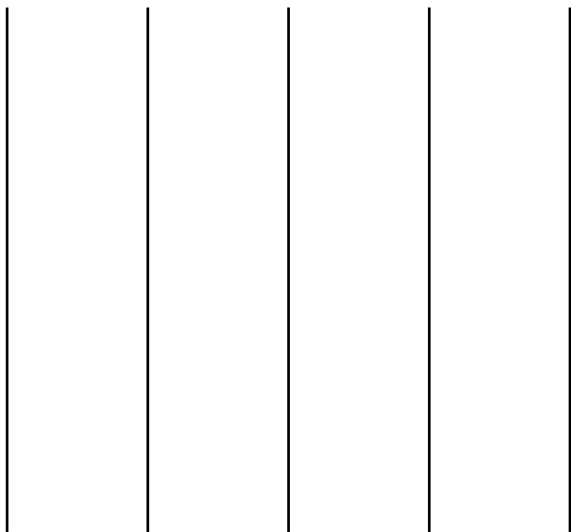
___ columns of 6 = ___




___ columns of 6 = ___

2) Draw flowers and bananas as columns of 3 as you like.

Solution:



___ columns of 3 = ___



___ columns of 3 = ___