



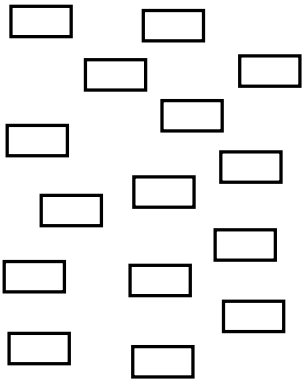
NAME _____

DATE _____

ARRANGEMENT OF ROWS AND COLUMNS

Create arrays using shape tiles with gaps.

1) a) Create two different arrays with the given rectangles.



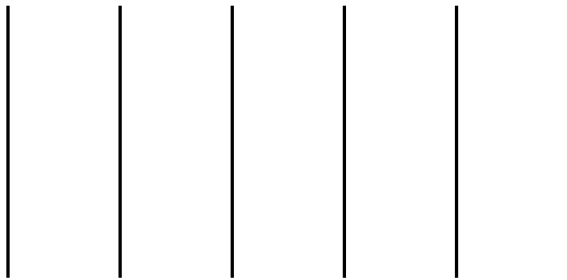
Solution:

__ rows of __.

$$_ + _ + _ = _.$$

b) Create another array with the rectangles from the set above.


Solution:



__ columns of __.

$$_ + _ + _ + _ + _ = _.$$

2) a) Create two different arrays with the given objects.



Solution:

__ rows of __.

$$_ + _ + _ + _ = _.$$

b) Create another array with the objects from the set above.

Solution:

__ rows of __.

$$_ + _ = _.$$