



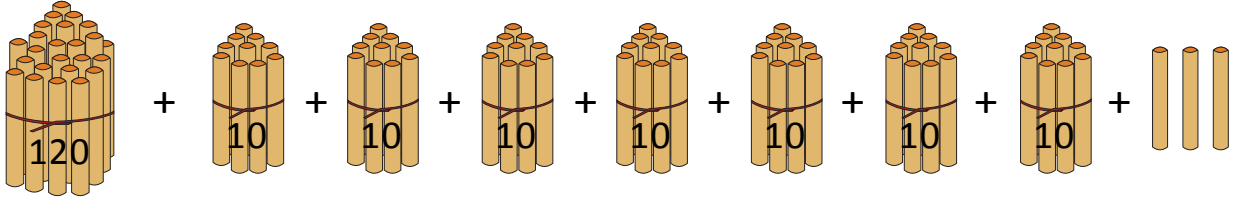
NAME _____

DATE _____

BUNDLE AND COUNT

Count up and down between 100 and 220 using ones and tens.


1. Draw label and box 120. Draw pictures of the units you use to count from 120 to 193.



$$= 120 + \underline{\quad} + 3$$

$$= \underline{\quad}$$

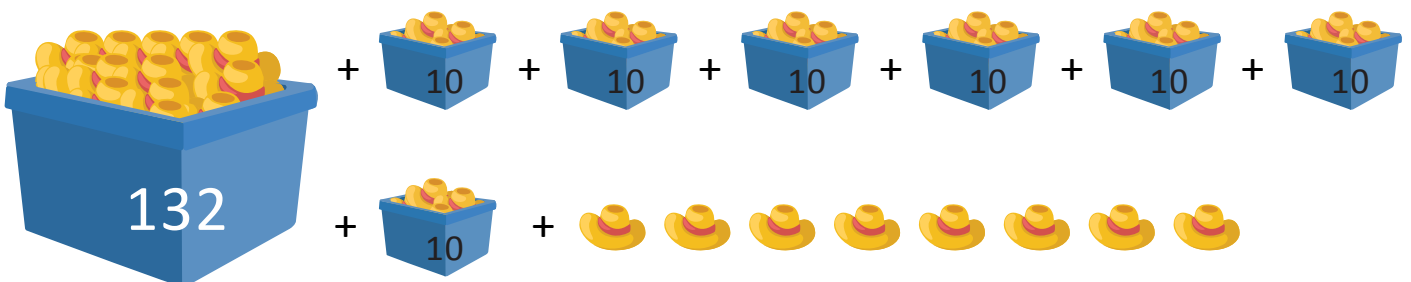
2. Draw label and box 130. Draw pictures of the units you use to count from 130 to 200.



$$= 130 + \underline{\quad}$$

$$= \underline{\quad}$$

3. Draw label and box 132. Draw pictures of the units you use to count from 132 to 210.



$$= 132 + \underline{\quad} + 8$$

$$= \underline{\quad}$$