



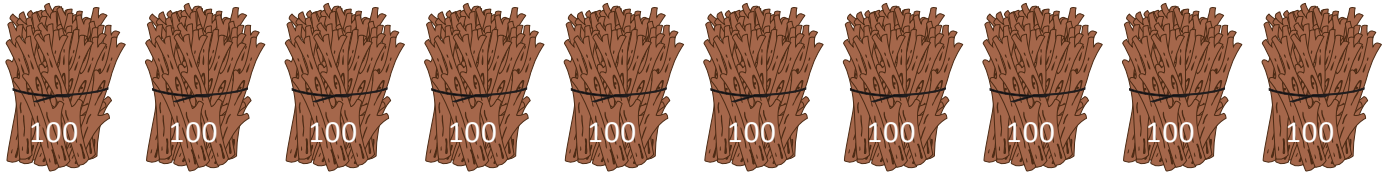
NAME _____

DATE _____

BUNDLE AND COUNT

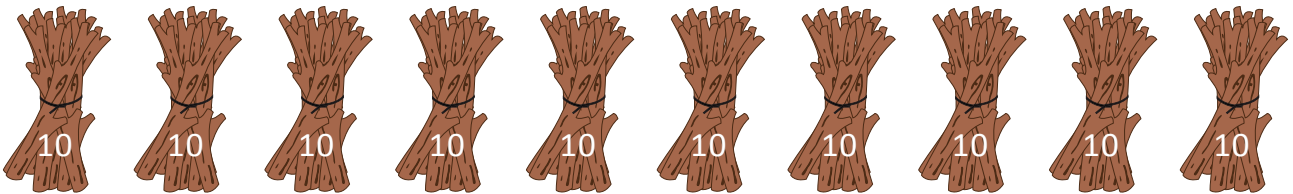
See the following example and do the remaining problems.

1. These are hundreds. If you put them together, which unit will you make?




- a) One b) Hundred c) Thousand d) Ten []

2. These are bundles of ten. If you put them together, which unit will you make?




- a) One b) Ten c) Hundred d) Thousand []

3. These are ones. If you put them together, which unit will you make?



- a) One b) Ten c) Hundred d) Thousand []

4. These are bundles of ten. If you put them together, which unit will you make?



- a) Thirty b) Twenty c) Sixty d) Forty []