



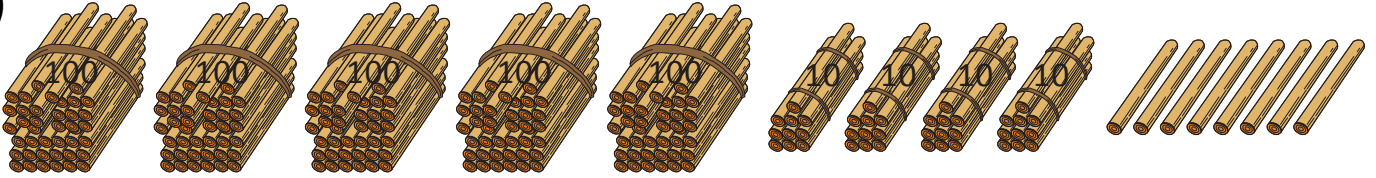
NAME _____

DATE _____

BUNDLE AND COUNT

These are bundles of hundreds, tens and ones. Write the numeral, expanded form and number name for each number shown.

1)

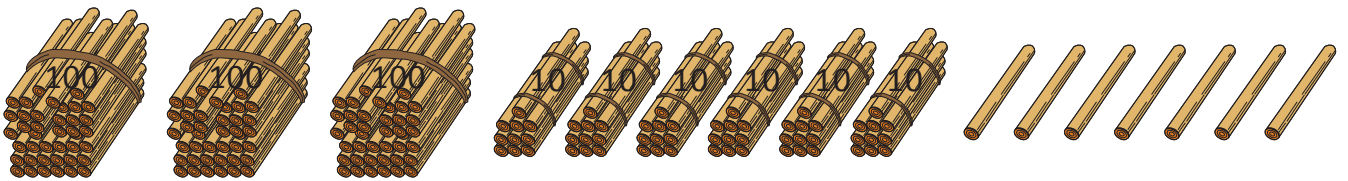


(a) Numeral = ____.

(b) Expanded form = ____ + ____ + ____.

(c) Number name = _____ + _____ + _____.

2)

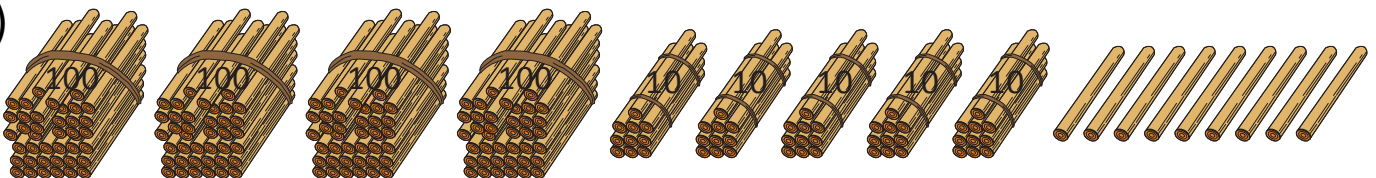


(a) Numeral = ____.

(b) Expanded form = ____ + ____ + ____.

(c) Number name = _____ + _____ + _____.

3)



(a) Numeral = ____.

(b) Expanded form = ____ + ____ + ____.

(c) Number name = _____ + _____ + _____.