



NAME _____

DATE _____

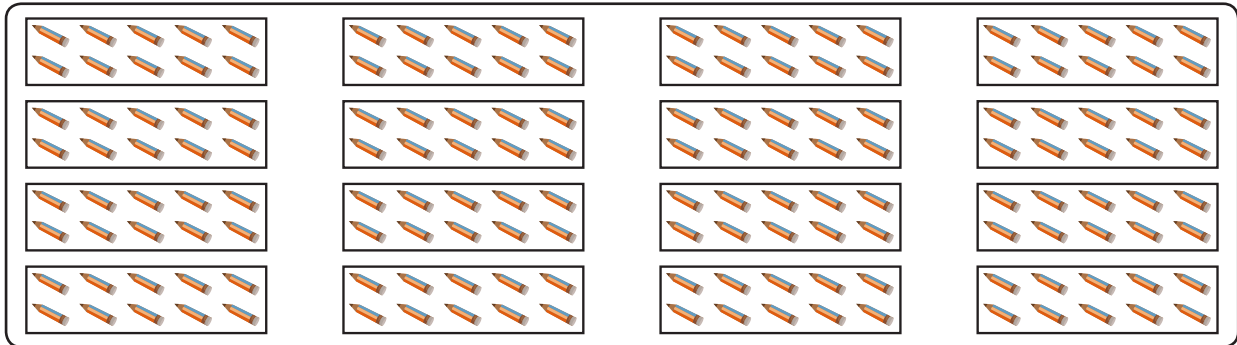
BUNDLE AND COUNT

Count up and down between 90 and 1000 using ones, tens and hundreds.


1. Draw, label, and box 160. Draw pictures of the units you use to count from 160 to 400.

Count from 160 to 400 we can write stated as under.


160, 170, 180, 190, 200, 300, 400




160 box



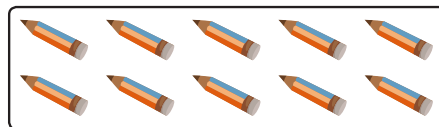
10 box




10 box




10 box



10 box



100 box



100 box

_____ + 10 + 10 + 10 + _____ + _____ + _____ = _____.