



NAME _____

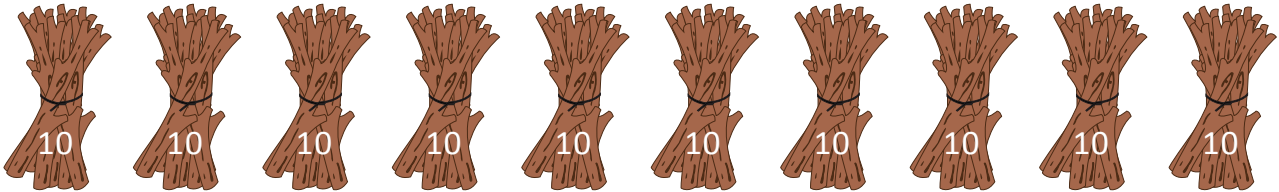
DATE _____

BUNDLE AND COUNT

Find out the correct values.


Example:

These are bundles of ten. If you put them together, which unit will you make?



- a) One b) Ten c) Hundred d) Thousand { c }

1. These are bundles of ten. If you put them together, which unit will you make?




- a) One b) Hundred c) Ten d) Sixty { }

2. These are bundles of ten. If you put them together, which unit will you make?



- a) One b) Forty c) Hundred d) Ten { }

3. These are bundles of ten. If you put them together, which unit will you make?



- a) Fifty b) Ten c) One d) Hundred { }