



NAME _____

DATE _____

BUNDLE AND COUNT


Count up to 1000 on the place value chart.

1. Imagine the place value chart. Write the numbers that show away to count from.

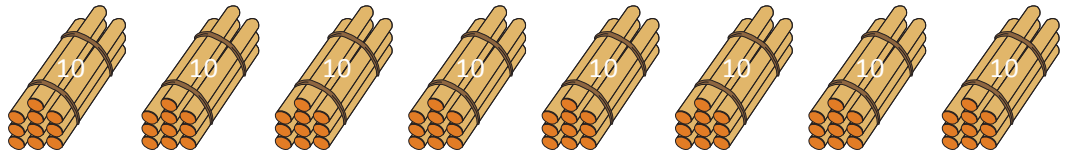
216 to 400

216, 217, ____, ____, 220, 230, 240, ____, ____, ____, 280, 290, 300, 400.

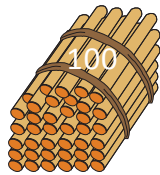
Ones = ____



Tens = ____



Hundreds = ____




Larger unit = ____.

2. Imagine the place value chart. Write the numbers that show away to count from.


384 to 700

384, 385, ____, ____, ____, 389, 390, 400, 410, ____, ____, ____, 450, 460, 470, 480, 490, 500, ____, 700.

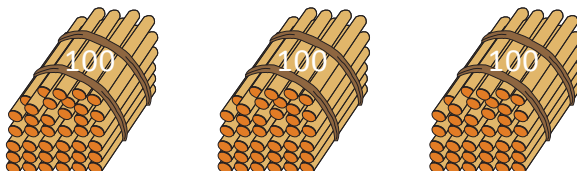
Ones = ____



Tens = ____



Hundreds = ____



Larger unit = ____.