



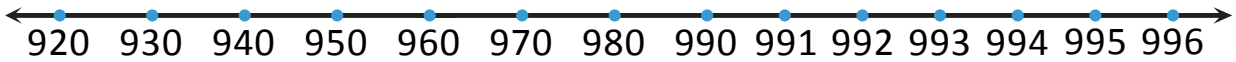
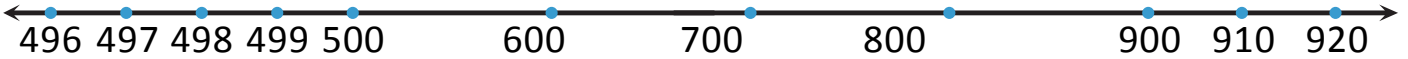
NAME _____ DATE _____

COUNTING DOLLARS ON NUMBER LINE

Count from \$1, \$10 to \$1000 on the place value chart and the empty number line.

1. Use each number line to show a different way to count from \$496 to \$996.

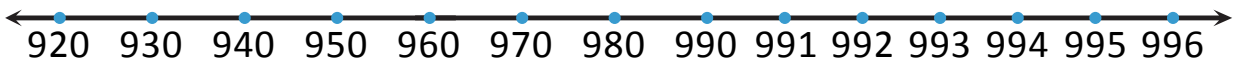
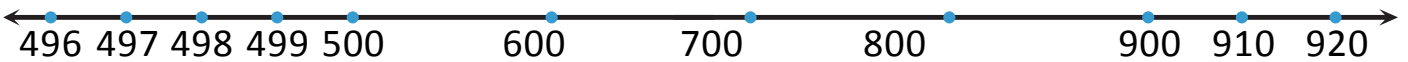
SOLUTION: 1st method:



| H | T | O |
|---|---|---|
| | | |

__ hundreds + __ tens + __ ones. ____ + ____ + ____ = ____

2nd method:



= __ ones.

= __ tens.

= __ hundreds.

____ + ____ + ____ = ____