

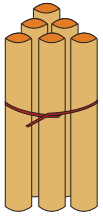


NAME \_\_\_\_\_

DATE \_\_\_\_\_

# ADDITION

Count the sticks, add and write the correct number.



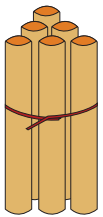
6

+



1

=



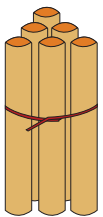
6

+



2

=



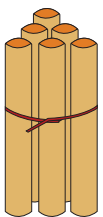
6

+



3

=



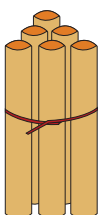
6

+



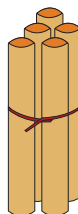
4

=



6

+



5

=