



NAME _____

DATE _____

ADDITION

Count the sticks, add and write the correct number.



1

+



1

=



1

+



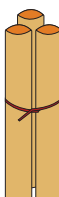
2

=



1

+



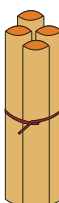
3

=



1

+



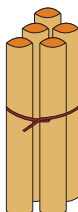
4

=



1

+



5

=