




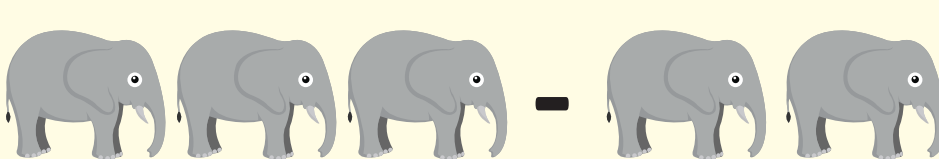




NAME _____

DATE _____

ANIMAL SUBTRACTION

Count and write the total number of animals left in each group.

<p>1</p> 	$\begin{array}{r} 4 \\ - 1 \\ \hline \end{array}$
<p>2</p> 	$\begin{array}{r} 8 \\ - 3 \\ \hline \end{array}$
<p>3</p> 	$\begin{array}{r} 5 \\ - 2 \\ \hline \end{array}$
<p>4</p> 	$\begin{array}{r} 3 \\ - 2 \\ \hline \end{array}$
<p>5</p> 	$\begin{array}{r} 6 \\ - 3 \\ \hline \end{array}$
<p>6</p> 	$\begin{array}{r} 7 \\ - 2 \\ \hline \end{array}$